



SCHREIBE DAS ERGEBNIS.




15

- $+2 =$ 17
- $+5 =$
- $+7 =$
- $+6 =$
- $+8 =$




27

- $+3 =$ 30
- $+5 =$
- $+2 =$
- $+7 =$
- $+8 =$




20

- $-2 =$ 18
- $-3 =$
- $-5 =$
- $-6 =$
- $-4 =$




24

- $-2 =$ 22
- $-4 =$
- $-6 =$
- $-9 =$
- $-10 =$



5

- $\times 2 =$ 10
- $\times 3 =$
- $\times 4 =$
- $\times 5 =$
- $\times 6 =$



3

- $\times 5 =$ 15
- $\times 4 =$
- $\times 6 =$
- $\times 2 =$
- $\times 3 =$